



Date: 01.06.2020 – 05.06.2020

**Suggested Daily Timetable:**

8:30-9:00	9:00-9:30	9:30-9:45	9:45-10:15	10:15-10:30	10:30-10:45
Wake up, have breakfast, get washed and dressed	Joe Wicks PE	Quick drink break and get things ready for Guided Reading	Guided Reading Activity	Timestables Rockstars	Get Outside!
10:45-11:30	11:30-12:30	12:30-1:30	1:30-1:45	1:45-3:00	3:00-3:15
Maths Activity	English Activity	Lunchtime	Read for Pleasure	Topic Activity	Read with someone/watch Newsround

### Guided Reading

*If you have a computer/iPad/phone to connect to the Internet:*

*If you do not have a computer/iPad/phone to connect to the Internet:*

**Monday:**

**30<sup>TH</sup> APRIL 2020**

## - THE NATION'S HERO -

# CAPTAIN TOM MOORE

By: A. Humphires

Although reaching your 100th birthday is a huge – and rare – achievement, it is rarely celebrated by a whole city, let alone a whole country! However, today, a man who was unknown to the nation just three weeks ago, has celebrated his landmark birthday with the British public in incredible style!

In order to celebrate his one hundredth birthday, the army veteran - Captain Tom Moore – had decided to raise money for the NHS Charities Together by walking one hundred laps of his garden. His aim was to raise money for the NHS that we are lucky to have in this country. He had not expected to raise more than one thousand pounds; donations now exceed £30 million! As always, Captain Tom shows great humbleness when talking about his astonishing achievement. Rather than praising his own efforts, he said that everyone who had donated was "magnificent"! He went on to say, "Reaching 100 is

On top of this, he has also received birthday wishes from a range of famous people, including Queen Elizabeth II and the Prime Minister – Boris Johnson. In his video message to Captain Tom, he stated: "Your heroic efforts have lifted the spirits of the entire nation; you've created a channel to enable millions to say a heartfelt thank you to the remarkable men and women in our NHS who have all been doing the most outstanding job."

As if that wasn't enough, Tom has also broken a World Record this week! When his single, 'You'll Never Walk Alone', which he sang alongside Michael Ball and members of the NHS, took the top spot last weekend, he became the oldest person to ever achieve a number one! It seems that Captain Tom Moore is an unstoppable force and perhaps we should all be inspired by his motto: "Tomorrow will

- Read the article with someone who can help you. Show your person the: headline, introduction, the 5 Ws and the by line.
- Find an example of a fact and an opinion.
- Who wrote the article?
- What do you think the writer thinks about Captain Moore's achievements?
- What do you think about Capt. Moor's achievements?

quite something. Reaching 100 with such interest in me and huge generosity from the public is very overwhelming."

Due to the self-isolation restrictions, which are currently in place across the country, Tom was unable to celebrate with his friends and family as he had planned to. Instead, he stayed at home with his daughter and her family at their home in Marston Moretaine, Bedfordshire. Although the captain, who has been made an honorary colonel by the Queen, was unable to celebrate with his family, he still had a day that he is unlikely to ever forget! Cards to celebrate his birthday have been flooding in over the last few weeks; it is estimated that he has received over 140,000 cards, which are having to be sorted at a local school. At 08:20, Tom was treated to an RAF flypast featuring a Spitfire and Hurricane from the RAF Battle of Britain Memorial Flight.

be a good day!" Whilst the donations page will close tonight, Tom and his family want to reassure the British public that they can still donate directly to the charity via their urgent appeal page. For now though, I think everyone will agree that this tremendous man deserves a few days rest!



 grammarsaurus.co.uk

### Tuesday:

Explain the meaning of these words:

Veteran, humbleness generosity, honorary, colonel, reassure and tremendous

Write the definition, find a synonym and use them in a sentence.

### Wednesday:

Who wrote the article?

2. What birthday is Captain Tom celebrating today?

3. a) Who was Captain Tom raising money for?

3. b) How did he raise the money?

4. How much money has Captain Tom raised so far?

5. a) What does it mean by the phrase 'great humbleness'?

5. b) How has Captain Tom shown that he is extremely humble?

**Thursday:** Use the Nations Hero to answer these questions.

Look up

1. List three ways that Captain Tom celebrated his birthday.

2. Answer these statements true or false then explain your answer.

3.

**True** **False**

Captain Tom received 14,000 birthday cards.

Boris Johnson visited Captain Tom at his home to wish him happy birthday.

Tom Moore became a chart-topper last week.

4. The Queen has decided to make Captain Tom an 'honorary colonel'.

Why do you think this decision was made? Do you agree with it? Why?

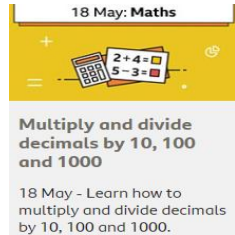
**Friday:**  
Read or remember your favourite narrative (story) you have at home. Use the template on page 9 to write a book review. Send your book review into school so we can all share your favourite story.

## Maths

### Daily.

Practise your multiplication tables. Use the Timestables Rock stars and <https://nrich.maths.org/6499> will help with mental math calculations.

### Additional Activity Monday: Adding and subtracting decimals



18 May: Maths

Multiply and divide decimals by 10, 100 and 1000

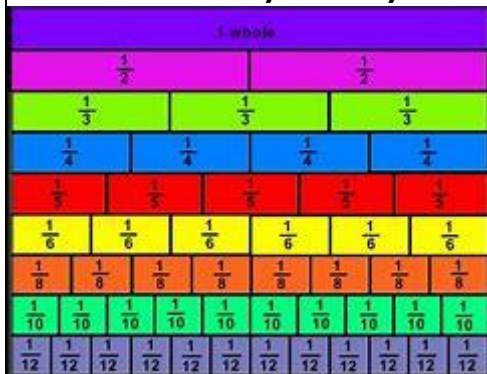
18 May - Learn how to multiply and divide decimals by 10, 100 and 1000.

Practise multiplying and dividing decimals by 10,100 and 1000.

You can either refresh using the maths revision guide or log into BBC bitesize daily lessons 18<sup>th</sup> May multiplying by 10, 100 and 1000.

1. Write the numerals 0-9 on a piece of paper.
2. Cut into rectangle cards.
3. Deal the cards to make different numbers for example: 3.89 and 51.09 or 7.2
4. Decide where you will place the decimal point to make a decimal number.
5. Order your numbers in descending order.
6. Read the numbers to an adult or sibling.
7. Pick numbers then multiply by 10,100 and 1000.
8. Pick numbers and divide by 10, 100, and 1000

### Additional Activity Tuesday: Fractions



Create a fraction wall. You can cut pieces of paper or use chalk outside to make a lifesize fraction wall.

"I love cake and always like to have the largest piece.  
I would rather have  $\frac{4}{9}$  of a cake than  $\frac{2}{6}$ ."

### Additional Activity: comparing fractions

Use your fraction wall and your knowledge of equivalent fractions to convert and compare the fractions below.

**Chocolate**  
× or =

$$\frac{1}{6} \quad \frac{3}{9}$$

**Brussel spouts**  
× or =

$$\frac{1}{2} \quad \frac{3}{4}$$

**Crisps**  
× or =

$$\frac{2}{4} \quad \frac{4}{8}$$

**Carrots**  
× or =

$$\frac{2}{3} \quad \frac{4}{6}$$

**Apples**  
× or =

$$\frac{6}{12} \quad \frac{3}{6}$$

**Cake**  
× or =

$$\frac{3}{9} \quad \frac{3}{18}$$

**Olives**  
× or =

$$\frac{4}{8} \quad \frac{1}{2}$$

**Marmite**  
× or =

$$\frac{1}{2} \quad \frac{5}{6}$$

**Peanut butter**  
× or =

$$\frac{4}{6} \quad \frac{6}{12}$$

**Jam**  
× or =

$$\frac{6}{16} \quad \frac{7}{8}$$

**Cheese**  
× or =

$$\frac{16}{20} \quad \frac{1}{2}$$

**Pizza**  
× or =

$$\frac{7}{18} \quad \frac{6}{6}$$

**Ham**  
× or =

$$\frac{21}{21} \quad \frac{3}{3}$$

**Grapes**  
× or =

$$\frac{1}{2} \quad \frac{3}{12}$$

**Pasta**  
× or =

$$\frac{7}{18} \quad \frac{2}{6}$$

**Ice cream**  
× or =

$$\frac{11}{30} \quad \frac{3}{10}$$

**Yoghurt**  
× or =

$$\frac{8}{21} \quad \frac{1}{3}$$

**Sweetcorn**  
× or =

$$\frac{24}{24} \quad \frac{2}{3}$$

**Chips**  
× or =

$$\frac{1}{24} \quad \frac{4}{4}$$

**Strawberries**  
× or =

$$\frac{3}{4} \quad \frac{1}{3}$$

**Additional Activity Thursday:** calculating with fractions. Remember to check your maths revision book to help you calculate. When we add and subtract fractions does the denominator need to be the same? Explain your ideas to an adult.

Explain the mistake

$$"1/2 + 3/8 = 4/10."$$

$$\frac{3}{4} \times 5 = \frac{15}{20}$$

How many ways?

Rank by difficulty

$$\frac{\square}{8} + \frac{1}{\square} = \frac{\square}{4}$$

The answer must be a proper fraction

$$\frac{1}{4} \times 5$$

$$\frac{3}{10} \times 3$$

Level 1: I can find a way

Level 2: I can find different ways

Level 3: I know how many ways there are

$$\frac{3}{4} \times 3$$

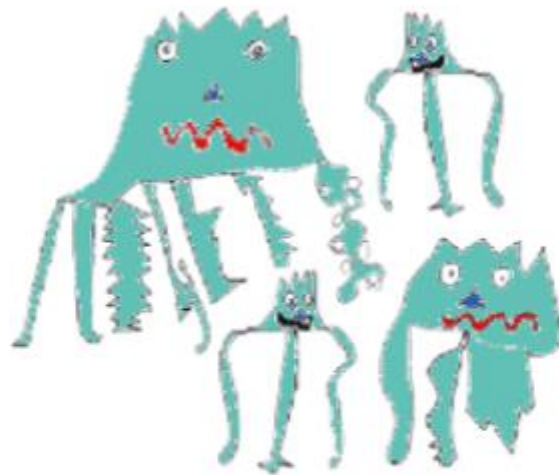
**Additional Activity Friday:** Reasoning practice.

Prove your answer and explain why.

"If I have 2 different coins then I can make 30 different amounts of money."



On the planet Vuv there are two sorts of creatures. The Zios have 3 legs and the Zepts have 7 legs.



The great planetary explorer Nico, who first discovered the planet, saw a crowd of Zios and Zepts. He managed to see that there was more than one of each kind of creature before they saw him. Suddenly they all rolled over onto their backs and put their legs in the air.

He counted 52 legs. How many Zios and how many Zepts were there?  
Do you think there are any different answers?

## English

**Monday: Daily diary entry**

Record how you feel about your day, what you have learnt, what tasks you have enjoyed doing. Think about how you felt over the past day and write 3 things that help you feel positive and three things that you hope to do this week.

**Tuesday:**



1. How do you think the horse ended up in the gate? What happened before the horse became stuck? Is there a reason the horse needed to get through the gate? What do you think could be in the next field? Write a diary entry as if you were the horse explaining what happened.
2. Imagine you are the horse. What would you say to the cow? What is the cow thinking? Will the cow help the horse? Write a conversation between the cow and the horse. Remember to use punctuate your direct speech using: “ .” ? , or ! and start a new line for a new speaker

Wednesday:



**Imagine that this woman has offered you an apple. She says that it is one of a kind; an apple so unique it will change your life for ever.**

**What could be make this apple so different? Write a narrative based on you taking the apple. How will it change your life? Is it enchanted? Will it change it for the better or worse? Will you want to reverse the change? If it changes your life for the better how will you repay the lady? If it changes your life for the worse will you take revenge or make the change work to your advantage?**

Thursday



### **Pet Finger Monkey**

#### **Finger Monkeys in the Wild**

Marmosets (Finger monkey) are naturally found in South America. They live in the tropical rainforests of the Atlantic coast and in northeast Brazil. There are a few places in Central American that you can find small population of marmoset monkeys.

Marmosets do have a large home range. They can travel 1/3 to 2/3 of a mile each day in their search of food. Finger monkeys are a species of monkey that completely live in the trees. They will live in an area of trees that provides them with food and hiding places which will be used for refuge when a predator threatens them. Wild marmosets eat a variety of foods. They will forage for flowers, nectar and fruits. Tree saps and tree gums along with bugs, spiders, frogs and snails. Marmosets are a social species are will live in groups averaging 8-10 monkeys and can be found in groups up to 15 in numbers.

Persuasive writing:

Do you think it is fair to keep these monkey as a pet? Here is an advert for a baby pygmy Marmoset Monkey. Write a letter to the breeder to either persuade him to stop selling monkeys or to donate a monkey.

## Finger Monkeys For Sale

At Tiny happy Faces, you can buy a finger monkey now at a fairly cheap price. We have amazing discounts on all our finger monkeys for sale. So if you have been on the search for a cheap finger monkey for sale. Grab this opportunity and benefit from our special offers. Are you looking for cheap finger monkeys for sale? visit our available monkeys to see the finger marmoset monkeys we have ready to go. Our discounts are yearly to enable those who can not afford to pay the high price for finger monkeys be able to buy a pygmy marmoset monkey. It has helped us in building a good reputation serving clients from all over in search for finger monkeys for sale.

Friday

If you could have any strange and wonderful pet what would it be? Would it be a mythical creature? Would it be able to talk to you?

Design your own ideal creature or pet and create an information leaflet to show people how unique your creature is. Remember to include: a title, introduction paragraph, diagram with labels, paragraphs about each special characteristic, a fun fact box and a summary.

## Topic

If you have a computer/iPad/phone to connect to the Internet:

If you do not have a computer/iPad/phone to connect to the Internet:

Monday:



Rock Art.

Find some interesting rocks from the beach or from your garden. Paint them or colour them in. Write some inspirational messages and leave them somewhere on one of your walks or in your house. Hopefully someone will find them, and you would have spread some happiness.




Tuesday

Make a food diary of everything that you have eaten or will eat today. Then use the food plate below to identify the food groups: Protein, starchy carbohydrates, dairy (or alternatives), fruit and vegetables and fats. Have you eaten all

# Eatwell Guide

Use the Eatwell Guide to help you get a balance of healthier and more sustainable food. It shows how much of what you eat overall should come from each food group.



Wednesday:

## The Eat Well Plate



The eat well plate shows how each meal should contain all food groups in moderation. It shows how to stay healthy we should eat more vegetables than protein. That means in an average meal our portion of vegetables should be greater than our portion of protein and carbohydrate.

Design your own meal that contains each food group in the correct proportions. See if you can help an adult create it.

Thursday:



**Moon Diary:**

Watch: <https://www.youtube.com/watch?v=f4ZHdzl6ZVg>

The moon appears to change shape, but it is due to the moon's orbit of our planet.

Create a glossary for:

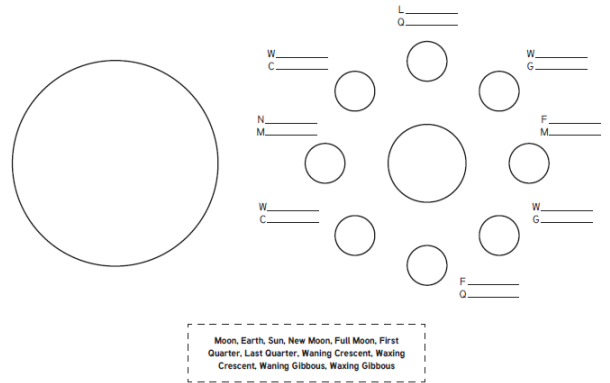
- Orbits
- Month
- New moon
- Waxing crescent
- Waxing gibbous
- First quarter
- Full moon
- Waning gibbous
- Third quarter
- Waxing gibbous

Create a moon diary.

1. Split a piece of paper into 24 squares (4 across and 6 down).
2. sketch a picture of your observation of the moon every night.
3. Label your sketch as either

**Phases of the Moon**

Complete the diagram and then label it with the names of the different phases of the Moon.



**Friday:**

Create a diagram of the moon's phases. You can draw your diagram, use dough or any other objects to make a 3-d model. Label your diagram and take a picture so you can share your work with people at school.

# My Book Review

Title: \_\_\_\_\_

Author: \_\_\_\_\_

## Genre:

- fiction
- biography
- horror
- mystery
- non-fiction
- sports
- adventure
- other: \_\_\_\_\_

Character: \_\_\_\_\_

Personality: \_\_\_\_\_

\_\_\_\_\_

Appearance: \_\_\_\_\_

\_\_\_\_\_

Draw your favourite character

Plot - what is it about? \_\_\_\_\_

\_\_\_\_\_

\_\_\_\_\_

\_\_\_\_\_

\_\_\_\_\_

Draw your favourite part of the book.

What is your favourite part?

\_\_\_\_\_

\_\_\_\_\_

\_\_\_\_\_

\_\_\_\_\_

Rating: ☆☆☆☆☆